

Classes/ Section	Total Number of Questions	Duration	Total Marks	Marking
For classes 1 to 5 Two Section	40	1 Hour	200	No Negative Marking
<b>Section 1 : Science</b>	20	30 Mins	100	No Negative Marking
<b>Section 2 : Maths</b>	20	30 Mins	100	No Negative Marking

**SYLLABUS**

**Class 1<sup>st</sup>**

**Section I Science :** Living and Non-living Things, Plants, Animals, Human Beings and Their Needs, Good Habits and Safety Rules, Air and Water, Weather and The Sky.

**Section II Maths :** Numerals, Number Names, Number Sense (2-digit numbers), Addition, Subtraction, Lengths, Weights and Comparisons, Time, Money, Geometrical Shapes and Solids, Patterns.


**Section 1 : Science**

1. Select the correct option.

(A)  lives in water.

(B)  can fly.

(C)  has six legs.

(D)  is the largest living animal.

2. Which part of our body helps us to see a flower?

(A) Eye

(B) Nose

(C) Ear

(D) Tongue

3. Choose the correct sequence of words to complete the paragraph given below.

Summer days are \_\_\_\_\_ while winter days are \_\_\_\_\_. A strong wind blows on \_\_\_\_\_. Monsoon days are \_\_\_\_\_.

(A) Cold, hot, a windy day, rainy

(B) Rainy, cold, a hot day, windy

(C) Hot, cold, a windy day, rainy

(D) Windy, hot, a rainy day, cold

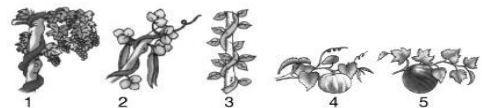
4. Which among the following are creepers?

(A) 1, 2, 3 only

(B) 4, 5 only

(C) 1, 4, 5 only

(D) 1, 2, 3, 4 and 5



5. Richa did an activity as shown here. She observed bubbles coming out of the glass. What does this activity show?



She took an empty glass.



She tilted the glass and slowly pushed it down into a tub of water.

(A) The empty glass is filled with air.

(B) Water displaces air in the glass.

(C) Air comes out of the water in the form of bubbles.

(D) All of these

6. Look at the picture and complete the following sentence.

Always cross the road at \_\_\_\_\_ crossing.

(A) Horse

(B) Zebra

(C) Footpath

(D) Traffic



7.  is a living thing because \_\_\_\_\_.

(A) It grows

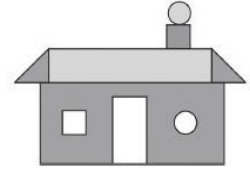
(B) It can make more sunflower plants

(C) It breathes

(D) All of these

8. The number of straight lines in the given picture is \_\_\_\_\_.

(A) 20  
(B) 23  
(C) 22  
(D) 19

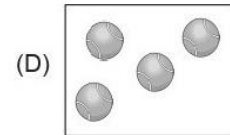
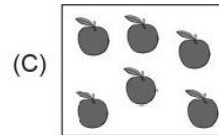




9. Tanuj drinks a few glasses of juice. There are \_\_\_\_\_ glasses of juice left. Tanuj drinks \_\_\_\_\_ glasses of juice.



(A) 4, 3                      (B) 7, 5                      (C) 7, 4                      (D) 3, 8

10. Which of the following sets has the greatest number of objects?




11. The length of the hockey stick is \_\_\_\_\_ units. (Use  as 1 unit).



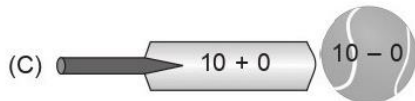

(A) 7                      (B) 4                      (C) 5                      (D) 6

12. Tanya bought 9 eggs from the market. She broke 4 eggs. How many eggs were not broken?



(A) 5                      (B) 4                      (C) 9                      (D) 7

13. Select the incorrect match.



14. Ritu has . Kirti has . How many ice-creams do they have altogether?

(A) 19                      (B) 18                      (C) 20                      (D) 22